

# Fantastic Four Year 1

**Fantastic  
FOUR**

○



# Fantastic FOUR

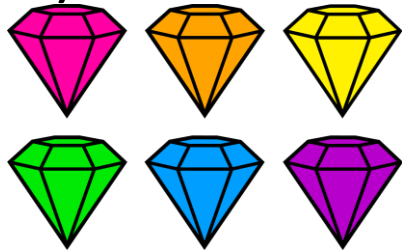
## Monday.

- 1) What is 1 more than:  
• 6                    17                    19                    21
- 2) What is 1 less than:  
• 7                    18                    20                    13
- 3)  $5 + 5 =$  \_\_\_\_\_
- 4)  $6 + 4 =$  \_\_\_\_\_
- Can you think of any more number bonds that make 10?

# Tuesday.


# Fantastic FOUR

- 1) Here are 6 diamonds. Can you double them?



- Double 6 is \_\_\_\_\_

- 2) Here are 4 hearts. Can you double them?




- Double 4 is \_\_\_\_\_

- 3) Here are 7 crayons. Can you double them?



- Double 7 is \_\_\_\_\_

- 4) Here are 10 apples. Can you double them?



- Double 10 is \_\_\_\_\_

# Wednesday.

- 1)  $10 - 7 =$
- 2)  $7 - 4 =$
- 3)  $11 - 5 =$
- 4)  $16 - 6 =$

The image shows the title 'Fantastic Four' in a bold, red, stylized font. The word 'Fantastic' is on the top line and 'FOUR' is on the bottom line. The letters are thick and have a slightly jagged, comic-book style appearance. The background is white, and the text is centered.



# Fantastic FOUR

## Thursday.

- 1) What month comes next....
- January, February, March, April, \_\_\_\_\_
  
- 2) What day comes next....
- Monday, Tuesday, \_\_\_\_\_
  
- 3) What day comes before Wednesday?
  
- 4) What day comes after Thursday?

# Fantastic FOUR

## Friday.

- 1) Sophie has 6 sweets.



- Adam has 4 sweets.



- How many more sweets does Sophie have than Adam?

- 2) Harvey has 9 cupcakes.



- Nina has 5.




- How many more cupcakes has Harvey got than Nina?

- 3) Jack has 10 cars.



- Oscar has 2 cars.



- How many more has Jack got than Oscar?
- 4) What is the total of 6 and 5 ?